


**Quiz**


# The Musical Staff

**DIRECTIONS:** Draw a whole note on the line or in the space shown below. One example has been given.

1. 


On the 3rd line    In the 1st space    On the 4th line    In the 3rd space    On the 1st line

**DIRECTIONS:** Draw a half note on the line or in the space shown below. One example has been given.

2. 


On the 2nd line    On the 4th line    In the 4th space    On the 5th line    In the 2nd space

**DIRECTIONS:** Draw a quarter note on the line or in the space shown below. One example has been given.

3. 

In the 1st space    On the 1st line    In the 3rd space    On the 4th line    In the 4th space

**DIRECTIONS:** Draw an eighth note on the line or in the space shown below. One example has been given.

4. 

In the 2nd space    On the 3rd line    In the 4th space    On the 1st line    In the 1st space

Quiz 2

# Notes and Rests

**DIRECTIONS:** What kind of note is it? Circle the correct answer.



- Half note
- Quarter note



- Quarter note
- Whole note



- Half note
- Eighth note



- Whole note
- Quarter note

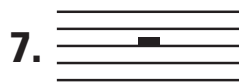
**DIRECTIONS:** What kind of rest is it? Circle the correct answer.



- Eighth rest
- Quarter rest



- Eighth rest
- Half rest



- Half rest
- Whole rest



- Half rest
- Whole rest

**DIRECTIONS:** Where is the note on the staff? Circle the correct answer.



- 4th line
- 2nd line



- 2nd space
- 2nd line



- 5th line
- 1st line



- 2nd space
- 3rd space

**DIRECTIONS:** Which clef is it? Circle the correct answer.



- Treble Clef
- Bass Clef
- Alto Clef











- Treble Clef
- Bass Clef
- Alto Clef

Quiz 3

# Know Your Notes and Rests

**DIRECTIONS:** Name each note or rest. Write the correct letter from the second column in the blank space.

- |          |   |                 |
|----------|---|-----------------|
| 1. _____ |    | A. Eighth Note  |
| 2. _____ |    | B. Eighth Rest  |
| 3. _____ |    | C. Quarter Note |
| 4. _____ |    | D. Quarter Rest |
| 5. _____ |    | E. Half Note    |
| 6. _____ |   | F. Half Rest    |
| 7. _____ |  | G. Whole Note   |
| 8. _____ |  | H. Whole Rest   |

**DIRECTIONS:** The arrow points to a part of a note. Name that part of the note. Write the correct letter from the second column in the blank space.

- |           |   |             |
|-----------|---|-------------|
| 9. _____  |  | I. Stem     |
| 10. _____ |  | J. Beam     |
| 11. _____ |  | K. Notehead |
| 12. _____ |  | L. Flag     |

## Quiz

## Note Values

**DIRECTIONS:** True or false? Circle the correct answer for each example.

1.  +  = 

True      False

2.  +  = 

True      False

3.  +  = 

True      False

4.  +  +  = 

True      False

5.  +  = 

True      False

6.  +  +  = 

True      False

7.  +  = 

True      False

8.  +  +  = 

True      False

9.  +  +  = 

True      False

10.  +  +  +  = 

True      False

## Quiz 5

## Rest Values

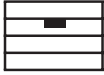






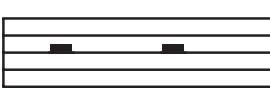












**DIRECTIONS:** True or false? Circle the correct answer for each example.

- |     |   |      |       |
|-----|---|------|-------|
| 1.  | $\frac{1}{2} + \frac{1}{2} = \frac{1}{2}$                             | True | False |
| 2.  | $\frac{1}{2} + \frac{1}{2} = \frac{1}{4}$                             | True | False |
| 3.  | $\frac{1}{2} + \frac{1}{2} + \frac{1}{2} + \frac{1}{2} = \frac{1}{2}$ | True | False |
| 4.  | $\frac{1}{2} + \frac{1}{2} + \frac{1}{2} + \frac{1}{2} = \frac{1}{2}$ | True | False |
| 5.  | $\frac{1}{2} + \frac{1}{2} = \frac{1}{4}$                             | True | False |
| 6.  | $\frac{1}{2} + \frac{1}{2} = \frac{1}{2}$                             | True | False |
| 7.  | $\frac{1}{2} + \frac{1}{2} = \frac{1}{4}$                             | True | False |
| 8.  | $\frac{1}{2} + \frac{1}{2} + \frac{1}{2} = \frac{1}{2}$               | True | False |
| 9.  | $\frac{1}{2} + \frac{1}{2} + \frac{1}{2} = \frac{1}{2}$               | True | False |
| 10. | $\frac{1}{2} + \frac{1}{2} = \frac{1}{4}$                             | True | False |

## Quiz

## Note and Rest Values

**DIRECTIONS:** True or false? Are the number of beats in the first example equal to the number of beats in the second example? Circle the correct answer.

- |     |   |   |   |      |       |
|-----|---|---|---|------|-------|
| 1.  |    | = |    | True | False |
| 2.  |    | = |    | True | False |
| 3.  |    | = |    | True | False |
| 4.  |    | = |    | True | False |
| 5.  |  | = |  | True | False |
| 6.  |  | = |  | True | False |
| 7.  |  | = |  | True | False |
| 8.  |  | = |  | True | False |
| 9.  |  | = |  | True | False |
| 10. |  | = |  | True | False |

## Quiz

## Identifying Notes

1. Circle all the whole notes in the example to the right.



2. Circle all the whole notes in the example to the right.



3. Circle all the half notes in the example to the right.



4. Circle all the half notes in the example to the right.



5. Circle all the quarter notes in the example to the right.



6. Circle all the quarter notes in the example to the right.



7. Circle all the eighth notes in the example to the right.



8. Circle all the eighth notes in the example to the right.



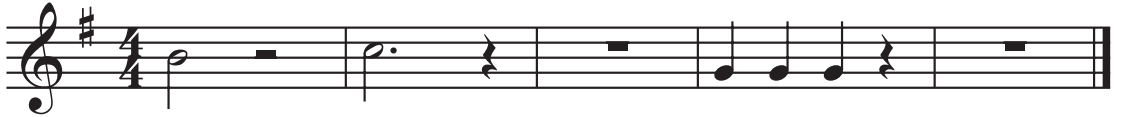
Quiz

# Identifying Rests

1. Circle all the whole rests in the example to the right.



2. Circle all the whole rests in the example to the right.



3. Circle all the half rests in the example to the right.



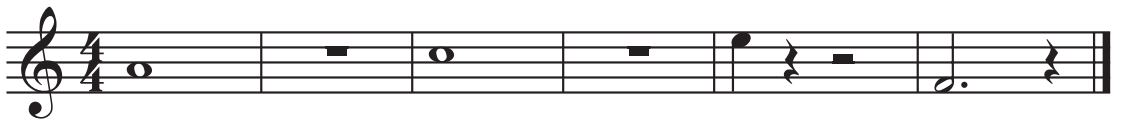
4. Circle all the half rests in the example to the right.



5. Circle all the quarter rests in the example to the right.



6. Circle all the quarter rests in the example to the right.



7. Circle all the eighth rests in the example to the right.



8. Circle all the eighth rests in the example to the right.





Quiz 9

# Identifying Notes and Rests

1. Circle all the whole notes in the example to the right.



2. Circle all the half notes in the example to the right.



3. Circle all the quarter notes in the example to the right.



4. Circle all the eighth notes in the example to the right.



5. Circle all the whole rests in the example to the right.



6. Circle all the half rests in the example to the right.



7. Circle all the quarter rests in the example to the right.



8. Circle all the eighth rests in the example to the right.



## Quiz 10

## Notes and Rests Math

**DIRECTIONS:** In each of the pairs of examples below, one example is correct and one is incorrect. Circle the letter of each example that is correct.

1. A.  +  = 

or

B.  +  = 

2. A.  +  +  = 

or

B.  +  = 

3. A.  +  +  = 

or

B.  +  +  +  = 

4. A.  +  = 

or

B.  +  = 

5. A.  +  = 

or

B.  +  = 

6. A.  +  = 

or

B.  +  +  = 

7. A.  +  = 

or

B.  +  = 

8. A.  +  = 

or

B.  +  +  = 

9. A.  +  = 

or

B.  +  +  = 

10. A.  +  +  = 

or

B.  +  +  +  = 

11. A.  +  = 

or

B.  +  = 

12. A.  +  +  +  = 



or



B.  +  +  = 



**Quiz 11**

# Do You Know Your Notes and Rests?



**DIRECTIONS:** The left example has one note in the staff. In the blank staff to the right, draw two notes which equal the note in the left example.



1.  = 



3.  = 

2.  = 



**DIRECTIONS:** The left example has one rest in the staff. In the blank staff to the right, draw two rests which equal the rest in the left example.



4.  = 

6.  = 



5.  = 


**DIRECTIONS:** The left example has one note in the staff. In the blank staff to the right, draw four notes which equal the note in the left example.

7.  = 

8.  = 

**DIRECTIONS:** The left example has one rest in the staff. In the blank staff to the right, draw four rests which equal the rest in the left example.

9.  = 

10.  = 